



A. Aşağıdaki ondalık gösterimleri sayı doğrusunda gösteriniz.


- 0,3




- 1,6



- 3,4



- 5,1




- 2,7




B. Aşağıdaki ondalık gösterimleri sayı doğrusunda gösteriniz.


- 3,2




- 3,24




- 4,7



- 4,76




- 4,763




A. Aşağıdaki ondalık gösterimleri sayı doğrusunda gösteriniz.


- 0,3




- 1,6




- 3,4



- 5,1




- 2,7




B. Aşağıdaki ondalık gösterimleri sayı doğrusunda gösteriniz.


- 3,2




- 3,24



- 4,7



- 4,76



- 4,763

